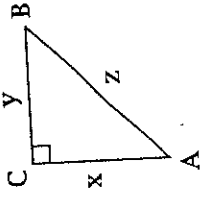
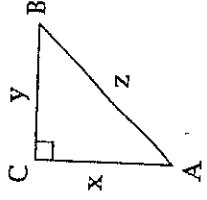


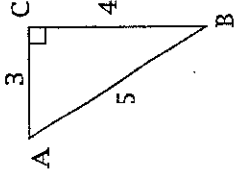
$$\sin A = \frac{4}{5}$$



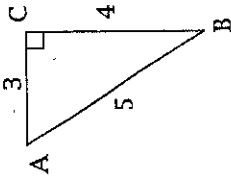
$$\sin B = \frac{y}{z}$$



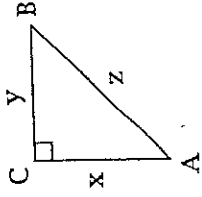
$$\sin A = \frac{x}{z}$$



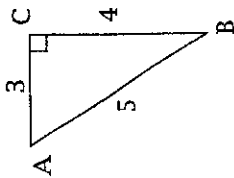
$$\sin A = \frac{3}{5}$$



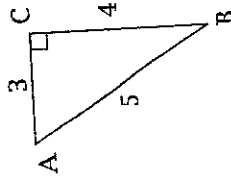
$$\sin B = \frac{4}{5}$$



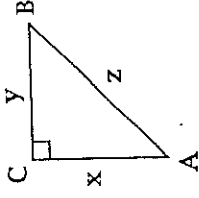
$$\sin A = \frac{y}{z}$$



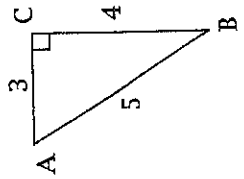
$$\sin A = \frac{4}{3}$$



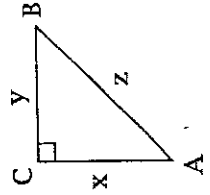
$$\sin B = \frac{3}{4}$$



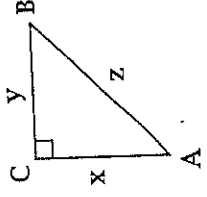
$$\sin B = \frac{x}{z}$$



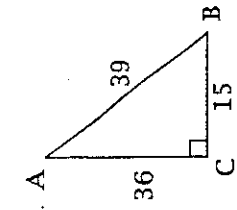
$$\sin B = \frac{3}{5}$$



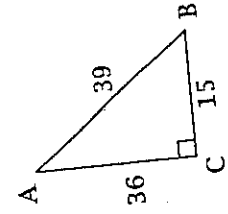
$$\sin A = \frac{y}{z}$$



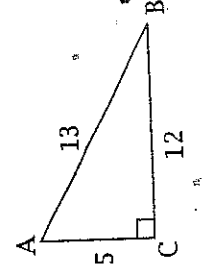
$$\sin B = \frac{y}{z}$$



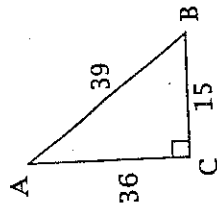
$A = \frac{5}{12}$



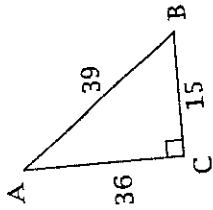
$B = \frac{5}{13}$



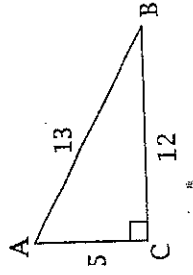
$A = \frac{12}{5}$



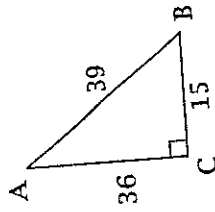
$A = \frac{5}{13}$



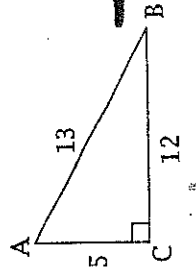
$B = \frac{12}{5}$



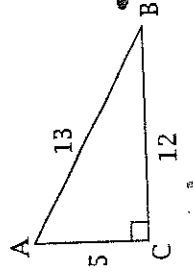
$B = \frac{5}{13}$



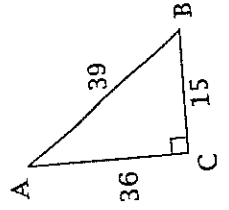
$A = \frac{12}{13}$



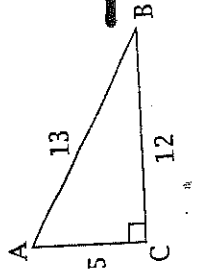
$A = \frac{12}{13}$



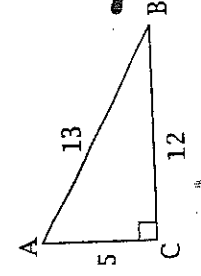
$B = \frac{12}{13}$



$B = \frac{12}{13}$



$A = \frac{5}{13}$



$B = \frac{5}{12}$